

*Contai Public School*  
Final Assessment 2020-21

**Class- II**  
**Subject – English I (Language)**

**Time : 2 hours**  
**Full Marks:75**

**Name:** \_\_\_\_\_ **Section:** \_\_\_\_\_

- A. Vocabulary. ( 5x1=5)
1. Write their pairs.
- a. Needle and -----.
  - b. Fork and -----.
  - c. Bread and -----.
  - d. Soap and -----.
  - e. Milk and -----.
2. Choose the correct answer. (5x1=5)
- a. An animal story with a moral  
( short story, fable, play)
  - b. A funny imitation of a poem  
( song, hymn, parody )
  - c. One who is not a citizen of the country  
( national, friend, foreigner )
  - d. School for infants and children  
( preparatory, kindergarten, college )
  - e. A short walk for pleasure  
( jog, brisk walk, stroll )
3. Tick the correct name according to the job description. (5x1=5)
- a. A person who fights for one's country  
( painter, soldier, driver, farmer )
  - b. A person who writes books and novels  
( author, painter, musician, vet )
  - c. A person who works in a library  
( chef, soldier, librarian, teacher )
  - d. A person who takes care of your teeth  
( florist, dentist, judge, magician )
  - e. A person who flies a plane  
( plumber, driver, pilot, driver )
- B. Choose the correct option. (3x1=3)
- a. What lovely flowers (.) (?) (!)
  - b. We are going to the mall (.) (?) (!)
  - c. Are burgers healthy (.) (?) (!)
- C. Rearrange the jumbled words to form proper sentences.
- Remember to begin each sentence with capital letter and end it with a full stop. (5x1=5)
- a. not am well I \_\_\_\_\_
  - b. doctor is aunt my a \_\_\_\_\_

c. cheetahs and are runners fast deer \_\_\_\_\_

d. good this is story book a \_\_\_\_\_

e. toy is train it a \_\_\_\_\_

D. Fill in the blanks with and, but, or, because. (4x1=4 )

a. Summers are hot \_\_\_\_\_ sunny.

b. I study everyday \_\_\_\_\_ I want to do well in class.

c. You can play at home \_\_\_\_\_ come out to play with me.

d. I want to play cricket \_\_\_\_\_ it is raining.

E. Divide these sentences into two. (3x1=3 )

a. Fire is hot but ice is cold. \_\_\_\_\_

b. I fell and I started to cry. \_\_\_\_\_

c. Rahul is tall but Tarun is short. \_\_\_\_\_

F. Write their short forms. (5x1=5 )

a. She will \_\_\_\_\_

b. I have \_\_\_\_\_

c. He is \_\_\_\_\_

d. They are \_\_\_\_\_

e. We are \_\_\_\_\_

G. Rewrite these sentences. Use capital letters, full stops, question marks and exclamation marks where required. (3x1=3 )

a. why did you come late \_\_\_\_\_

b. this apple is bitter \_\_\_\_\_

c. what a beautiful sunset \_\_\_\_\_

H. Fill in the blanks with prepositions given in the bracket. (5x1=5 )

( in, on, under, behind, beside )

a. The flowers are \_\_\_\_\_ the vase.

b. The boat is \_\_\_\_\_ the bridge.

c. The frog is sitting \_\_\_\_\_ the leaf.

d. The girl is \_\_\_\_\_ the curtain.

e. There is a swing \_\_\_\_\_ the house.

I. Choose the correct word. (5x1=5)

a. \_\_\_\_\_ name is Raghu. ( My, I, Mine )

b. Miss Kohli is \_\_\_\_\_ English teacher. (we, ours, our )

c. We have our cars. Have you got \_\_\_\_\_? (you, your, yours)

d. The dog saw me and wagged \_\_\_\_\_ tail. (it, its, it's )

e. I have two brothers. \_\_\_\_\_ names are Luv and Kush. (They, Theirs, Their)

J. Add ly or ily to these adjectives to form adverbs. (5x1=5)

a. lazy \_\_\_\_\_

b. rough \_\_\_\_\_

c. angry \_\_\_\_\_

d. clear \_\_\_\_\_

e. easy \_\_\_\_\_

K. Fill in the blanks with was or were.

(4x1=4 )

- a. The children \_\_\_\_\_ flying kites.
- b. The child \_\_\_\_\_ crawling on the floor.
- c. The teachers \_\_\_\_\_ correcting our notebooks.
- d. Rahul \_\_\_\_\_ painting a scenery.

L. Fill in the blanks with the simple past form of the verbs given in the brackets.

(5x1=5 )

- a. I \_\_\_\_\_ (help) my mother clean the house.
- b. We \_\_\_\_\_ (wash) the car last Sunday.
- c. It \_\_\_\_\_ (rain) heavily last evening.
- d. Micky \_\_\_\_\_ (run) with the balloons.
- e. Naina \_\_\_\_\_ (fly) a kite.

M. Complete the sentences by using am, is or are and the ing form of the verbs in the brackets.

(5x1=5 )

- a. The dog \_\_\_\_\_ . (bark)
- b. I \_\_\_\_\_ (sleep)
- c. The students \_\_\_\_\_ . (play)
- d. The stars \_\_\_\_\_ . (shine)
- e. A. cat \_\_\_\_\_ milk. (drink)

N. Tick the correct verb and write it in the blanks.

(8x1=8 )

Ali \_\_\_\_\_ (play/plays) in the rain. He \_\_\_\_\_ (likes/ like) the cool water falling on him. He (wants/want) \_\_\_\_\_ to make paper boats. He also \_\_\_\_\_ (wants/want) to play with his friends. He does not \_\_\_\_\_ (like/likes) to stop playing. Ali's mother \_\_\_\_\_ (call/calls) him inside. She \_\_\_\_\_ (say/says), " Please do not \_\_\_\_\_ (get/gets) wet."

**CONTAI PUBLIC SCHOOL**  
**Final Assessment 2020-21**

**Class – II**  
**Subject – English II**

**Time : 2 hours**  
**Full Marks= 75**

**Name:** \_\_\_\_\_ **Section:** \_\_\_\_\_

Q1. Tick the correct words to complete these sentences: 5

i. Hasan sold the pots and pans for \_\_\_\_\_.  
a. Fifty dinars    b. five dinars    c. a haircut

ii. Hasan wanted to teach the \_\_\_\_\_ a lesson.  
a. People    b. barber    c. Qazi

iii. Bugloo was looking for a house to \_\_\_\_\_.  
a. buy    b. rob    c. sleep

iv. The \_\_\_\_\_ chased Latula .  
a. tables and chairs    b. Bugloo    c. Grandpa

v. The barber was \_\_\_\_\_.  
a. foolish    b. cunning    c. poor

Q2. Write the words from the box in the correct columns. 10

Spin, hopped, buzzed, rolled, yelled, screamed, skated, hummed, sang, slid

MOVEMENT WORDS	SOUND WORDS

Q3. Fill in the blanks: 6

i) The king was \_\_\_\_\_ (sorry/ happy) to hear about the mice.

ii) The herd of \_\_\_\_\_ ( ants/ elephants) lived in the jungle.

iii) I bought \_\_\_\_\_ books \_\_\_\_\_ my sister. (for/ four)

iv) This is the \_\_\_\_\_ way to \_\_\_\_\_ your answer. (write/right)

Q4. Write the opposites of these words:

6

i) similar \_\_\_\_\_  
iii) full \_\_\_\_\_  
v) always \_\_\_\_\_

ii) pushed \_\_\_\_\_  
iv) likely \_\_\_\_\_  
vi) known \_\_\_\_\_

Q5. Match the columns

5

i. as busy as  
ii. as cold as  
iii. as big as  
iv. as sweet as  
v. as light as

a. ice  
b. honey  
c. a feather  
d. a bee  
e. an elephant

Q6. Write the meaning of the following words:

6

i. pit \_\_\_\_\_  
iii. escalator \_\_\_\_\_  
v. dinar \_\_\_\_\_

ii. wise \_\_\_\_\_  
iv. merchant \_\_\_\_\_  
vi. unload \_\_\_\_\_

Q7. Who said these words :

5

i. "Many elephants have been caught by trappers." \_\_\_\_\_  
ii. "Where is the metro?" \_\_\_\_\_  
iii. "My smart little top!" \_\_\_\_\_  
iv. "What is the price of your goods?" \_\_\_\_\_  
v. "You did not make a clear deal." \_\_\_\_\_

Q8. Make sentences:

10

i. simple and poor \_\_\_\_\_  
ii. ride \_\_\_\_\_  
iii. lake \_\_\_\_\_  
iv. fun \_\_\_\_\_  
v. unhappy \_\_\_\_\_

Q9. In each set of words ,there is one word that does not belong to the group. Circle it.

5

i. barber	postman	doctor	tree
ii. sparrow	swan	table	eagle
iii. mango	apple	rose	banana
iv. scissors	bird	hammer	nail-cutter
v. onion	chair	potato	garlic

Q10. Add 'ly' and rewrite these words.

5

i. week \_\_\_\_\_

ii. soft \_\_\_\_\_

iii. brave \_\_\_\_\_

iv. month \_\_\_\_\_

v. deep \_\_\_\_\_

Q11. Answer the following questions:

12

i. Name the colours of a rainbow.

ii. Name two places where Double Four went.

iii. Where was the barber's shop ?

iv. Why couldn't the children see through the window at first?

v. How did the mice help the elephants?

vi. What did Latula like to do?

*CONTAI PUBLIC SCHOOL*  
**Final Assessment 2020-21**

**Class – II**  
**Subject – Environmental Studies**

**Time : 2 hours**  
**Full marks= 75**

**Name:** \_\_\_\_\_ **Section:** \_\_\_\_\_

**Q1. Tick the correct options:**

**5X1=5**

- a. She teaches us in the school.  
i) nurse      ii) policeman      iii) teacher
- b. It is a means of land transport.  
i) aeroplane      ii) train      iii) ship
- c. They make us fall sick.  
i) books      ii) germs      iii) fruits
- d. It makes water dirty.  
i) waste from houses      ii) watering plants      iii) cooking food
- e. These can fly.  
i) birds      ii) amphibians      iii) reptiles

**Q2. Name the followings:**

**4X2= 8**

- a. Two religious festivals - \_\_\_\_\_ , \_\_\_\_\_
- b. Two national festivals - \_\_\_\_\_ , \_\_\_\_\_
- c. Two carnivores animals - \_\_\_\_\_ , \_\_\_\_\_
- d. Two terrestrial animals - \_\_\_\_\_ , \_\_\_\_\_

**Q3. Correct the words which are given in bold letter.**

**5X1=5**

- a. The **waiter** stitches our clothes. \_\_\_\_\_
- b. The **baker** sells tickets in the buses. \_\_\_\_\_
- c. The **doctor** helps the children to read and write. \_\_\_\_\_
- d. The **guard** constructs the houses and building. \_\_\_\_\_
- e. The **pilot** helps the people inside the aeroplane. \_\_\_\_\_

**Q4. Match the following:**

**6X1=6**

- |                    |                          |
|--------------------|--------------------------|
| a. carpenter       | i) fruits and vegetables |
| b. water transport | ii) honking              |
| c. air transport   | iii) plugs               |
| d. farmer          | iv) helicopter           |
| e. electrician     | v) furniture             |
| f. noise pollution | vi) cruise liner         |

**Q5.Circle the odd one out:**

**5X1=5**

- |             |              |            |            |
|-------------|--------------|------------|------------|
| a. boat     | train        | ship       | steamer    |
| b. cycle    | scooter      | motorcycle | car        |
| c. rocket   | aeroplane    | tractor    | helicopter |
| d. train    | truck        | cycle      | ship       |
| e. rickshaw | bullock cart | camel cart | tonga      |

**Q6. Fill in the blanks:**

**6X1=6**

- The magician plays magic\_\_\_\_\_.
- We need \_\_\_\_\_ air to stay healthy.
- \_\_\_\_\_ is the harvest festival Kerala.
- \_\_\_\_\_ helps in sailing boats.
- \_\_\_\_\_ give gifts to the children on Christmas.
- The \_\_\_\_\_ works in movies.

**Q7. Name the homes of:**

**6X1=6**

- Hen \_\_\_\_\_
- Cow \_\_\_\_\_
- Horse \_\_\_\_\_
- Rabbit \_\_\_\_\_
- Dog \_\_\_\_\_
- Tiger \_\_\_\_\_

**Q8. Answer in one or two words:**

**3X1=3**

- Air transport that can land on hills.
- Boat that runs on steam.
- The train which carries passengers within the city.

**Q9. Answer the following questions:**

**6X2=12**

- What is an occupation?
- Name any two commonly used fuels.
- What are festivals?
- Why do we call plants our 'green friends'?
- State any two ways of saving water.
- How is air useful to us?

**Q10. Draw, label and colour the life cycle of a butterfly.**

**9**

**Q11. Draw, label and colour the parts of a plant.**

**10**



*CONTAI PUBLIC SCHOOL*  
**Final Assessment 2020-21**

**Class- II**  
**Subject – Mathematics**  
**Name:** \_\_\_\_\_

**Time : 2 hours**  
**Full Marks=75**

**Section:** \_\_\_\_\_

**1. Answer the following: (10×2=20)**

- a) Write the **number name** of: 784 \_\_\_\_\_
- b) Write in **figures**: Nine hundred twenty – two \_\_\_\_\_
- c) Write the number that comes **before**: \_\_\_\_\_ 536
- d) Write the number that comes **after**: 969 \_\_\_\_\_
- e) Write the number **between**: 700 \_\_\_\_\_ 702
- f) Write the **face value** of the underlined digit: 819 \_\_\_\_\_
- g) Write the **place value** of the underlined digit: 237 \_\_\_\_\_
- h) Write in the **expanded form**:  $546 = \underline{\hspace{1cm}} + \underline{\hspace{1cm}} + \underline{\hspace{1cm}}$
- i) Write in **ascending order**: 802, 104, 349, 112 \_\_\_\_\_, \_\_\_\_\_, \_\_\_\_\_, \_\_\_\_\_
- j) Form the **greatest** and the **smallest** three – digit number using the given digits:  
4, 1, 7  
Greatest Number \_\_\_\_\_ Smallest Number \_\_\_\_\_

**2. Solve the following: (6×1=6)**

- a) Fill in the box:  $4 + 4 + 4 + 4 + 4 = \boxed{\hspace{1cm}}$
- b) Write as repeated addition:  $5 \times 3 = \underline{\hspace{2cm}}$
- c)  $0 \times 9 = \underline{\hspace{1cm}}$       d)  $4 \times 100 = \underline{\hspace{1cm}}$
- e)  $7 \times 1 = \underline{\hspace{1cm}}$       f)  $67 \times 10 = \underline{\hspace{1cm}}$

**3. Multiply: (2×2=4)**

- a)    **T O**      (b)    **H T O**  
      5 8                        7 4  
      × 1                        × 7  
      \_\_\_\_\_  
      \_\_\_\_\_

**4. Fill in the blanks: (2)**

In  $24 \div 8 = 3$ ,  
Dividend = \_\_\_\_\_, Divisor = \_\_\_\_\_, Quotient = \_\_\_\_\_

**5. Divide: (2×2=4)**

- a)  $4 \overline{) 32}$                       (b)  $9 \overline{) 36}$

**6. Fill in the blanks: (4×1=4)**

- a)  $15 \div 15 = \underline{\hspace{1cm}}$       (b)  $0 \div 8 = \underline{\hspace{1cm}}$   
c)  $56 \div 7 = \underline{\hspace{1cm}}$       (d)  $27 \div 9 = \underline{\hspace{1cm}}$

7. Answer the following: (2x2=4)

a) Write in words: ₹ 68.50 \_\_\_\_\_

b) Write in numeral: Twenty – three rupees and fifteen paise \_\_\_\_\_

8. Add or Subtract: (3x2=6)

a) 
$$\begin{array}{r} 68 \\ - 14 \\ \hline \\ \hline \end{array}$$

(b) 
$$\begin{array}{r} 59 \\ + 30 \\ \hline \\ \hline \end{array}$$

(c) 
$$\begin{array}{r} 90 \\ - 13 \\ \hline \\ \hline \end{array}$$

9. Write the time:

a)



\_\_\_\_\_

(b)



\_\_\_\_\_

(c)



\_\_\_\_\_

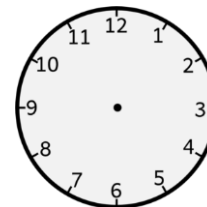
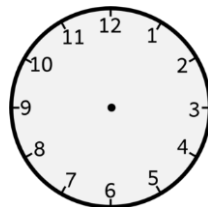
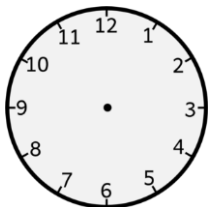
(3x2=6)

10. Draw hands to show the time: (3x2=6)

a) 5 O' clock

(b) A quarter to 12

(c) Half past 11



11. Fill in the blanks: (3x1=3)




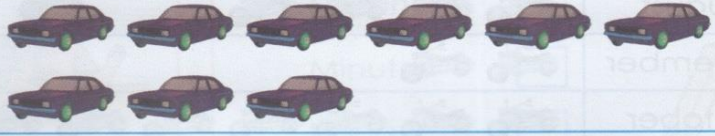

a) Which day comes before Thursday? \_\_\_\_\_

b) How many days are there in August? \_\_\_\_\_

c) How many months have 30 days in a year? \_\_\_\_\_

12. Garima decided to conduct a study on most popular car colour. So she stood outside her house and recorded her observations about 50 cars that passed from there.

This is the observation she recorded.

Car colours	Number of cars
Green Cars	
Red Cars	
Blue Cars	
Black Cars	
Orange Cars	

**Study the pictograph given above and answer the following questions: (5x2=10)**

- a) How many cars in all did Garima count? \_\_\_\_\_
- b) How many black cars did Garima count? \_\_\_\_\_
- c) How many green cars did Garima count? \_\_\_\_\_
- d) Which two colours of cars are same in number? \_\_\_\_\_
- e) What colour is the least among these cars? \_\_\_\_\_

\*\*\*\*\*

CONTAI PUBLIC SCHOOL  
Final Assessment 2020-21

Class- II  
Subject – Hindi  
Name: \_\_\_\_\_

Time : 2 hours  
Full Marks=75

Section: \_\_\_\_\_

1. दिए गए शब्दों के अर्थ लिखिए : (10)

- |                  |                   |                   |
|------------------|-------------------|-------------------|
| a. हठ - _____    | b. भोजन - _____   | c. खास - _____    |
| d. महक - _____   | e. रक्षा - _____  | f. आक्रमण - _____ |
| g. प्रेम - _____ | h. निराले - _____ | i. अभिमान - _____ |
| j. बंधु - _____  |                   |                   |

2. निम्नलिखित शब्दों की सही वर्तनी लिखिए: (5)

- |                   |                 |                   |
|-------------------|-----------------|-------------------|
| a. चीडीया - _____ | b. आंख - _____  | c. साहयता - _____ |
| d. पतंग - _____   | e. अवशय - _____ |                   |

3. दिए गए पुल्लिंग शब्दों के लिए स्त्रीलिंग शब्द लिखिए (5)

- |                  |                   |                 |                  |                 |
|------------------|-------------------|-----------------|------------------|-----------------|
| a. लड़का - _____ | b. मुर्गा - _____ | c. चूहा - _____ | d. बच्चा - _____ | e. चाचा - _____ |
|------------------|-------------------|-----------------|------------------|-----------------|

4. समान अर्थ वाले शब्दों के मिलान कीजिए (5)

- |           |         |
|-----------|---------|
| a. डाल    | i. बचाव |
| b. समाचार | ii. पशु |
| c. जानवर  | iii. वन |
| d. जंगल   | iv. खबर |
| e. रक्षा  | v. शाखा |

5. कोई 6 संज्ञा शब्द लिखिए (6)

\_\_\_\_\_

6. 'हाँ' या 'नहीं' में उत्तर दीजिए (10)

- लोमड़ी मुर्गों को खाना चाहती थी। [ ]
- लोमड़ी ने सूझबूझ से अपनी रक्षा की। [ ]
- चंद्रमा ने ऊन का झिंगोला सिलवाने के लिए कहा। [ ]
- चंद्रमा कभी एक माप में नहीं रहता। [ ]
- विलबर और ऑरविल ने ढेरों गुब्बारे फुलाकर उन्हें उड़ाया। [ ]
- विलबर और ऑरविल दोनों भाई थे। [ ]
- विलबर गगन में चिड़ियों की तरह उड़ना चाहता था। [ ]
- फूलों को तोड़ना नहीं चाहिए। [ ]
- पानी देने से पौधे मुरझा सकते हैं। [ ]

j. पौधों को भी भोजन की आवश्यकता होती है। [ ]

7. सही उत्तर पर (✓) चिन्ह लगाइए

(10)

- a. खाद किसका भोजन है?  
i. मनुष्य का      ii. पौधों का      iii. मिट्टी का
- b. पौधे लगाकर उनमें \_\_\_\_\_ देना बहुत जरूरी है।  
i. चाय      ii. पानी      iii. दूध
- c. पेड़ की डाल पर कौन बैठा था?  
i. मुर्गा      ii. कोयल      iii. तोता
- d. लोमड़ी ने मुर्गे को कहीं का समाचार सुनाया ?  
i. शहर का      ii. जंगल का      iii. गाँव का
- e. \_\_\_\_\_ हिंदुओं की धार्मिक पुस्तक है।  
i. रामायण      ii. कुरान      iii. बाइबल
- f. भारत में रहने वाले लोग \_\_\_\_\_ कहलाते हैं।  
i. भारती      ii. अंग्रेजी      iii. भारतीय
- g. चंद्रमा ने अपनी माँ से क्या सिलवाने को कहा ?  
i. टोपी      ii. पाजामा      iii. झिंगोला
- h. यात्रा का क्या अर्थ है ?  
i. रास्ता      ii. हाथ      iii. माँ
- i. राइट बंधु कहीं के निवासी थे?  
i. जर्मनी      ii. अमेरिका      iii. ऑस्ट्रेलिया
- j. विलबर के छोटे भाई का क्या नाम था ?  
i. थॉमस      ii. ऑरविलर      iii. जॉन

8. सही शब्द चुनकर वाक्य पूरे कीजिए :

(8)

बात पेड़ अच्छा बैठा पतंग वायुयान माँ चमक

- a. दिलबर की आंखों में \_\_\_\_\_ आ गई।  
b. मुर्गा पेड़ पर \_\_\_\_\_ था।  
c. \_\_\_\_\_ उड़ रही है।  
d. लोमड़ी \_\_\_\_\_ के नीचे खड़ी थी।  
e. \_\_\_\_\_ मुस्कुराकर अपने काम में लग गई।  
f. मुर्गा और लोमड़ी \_\_\_\_\_ कर रहे थे।  
g. \_\_\_\_\_ बहुत तेज उड़ता है।  
h. यह तो सचमुच बहुत \_\_\_\_\_ समाचार है।

9. किसने किससे कहा ?

(12)

- a. " चिड़िया कैसे उड़ती है ? "  
\_\_\_\_\_
- b. "क्यों ना हम पतंग बनाएँ और उसे आकाश में उड़ाएँ। "  
\_\_\_\_\_
- c. " मैं हिंसक पशुओं के डर से यहाँ बैठा हूँ। "  
\_\_\_\_\_
- d. " हम दोनों साथ बैठकर कुछ गपशप करेंगे। "  
\_\_\_\_\_

---

e. " हम एक -न -एक दिन ऐसी मशीन अवश्य बनाएँगे । "

---

f. " अब कोई किसी पर आक्रमण नहीं करेगा। "

---

10. वाक्य शुद्ध करके लिखिए

(4)

a. भारत बहुत बड़े देश है।

---

b. हम मंदिर जाकर पूजा करता हूँ।

---



Contai Public School  
Final Examination 2020-21

Class – II  
Subject :- Bengali

F.M.- 75  
Time : 2 Hrs.

Name : \_\_\_\_\_

Roll No. \_\_\_\_\_

Section. \_\_\_\_\_

১। নিচের শব্দ গুলি দিয়ে শূন্যস্থান পূরন করো।

6x2=12

[ রান্নাঘর, ফুলদানি, সাজসজ্জা, আনন্দবাবু, মালাচন্দন, পাল্লাটা ]

ক) বিন্দুকে বলে \_\_\_\_\_ তৈরি রাখা চাই।

খ) \_\_\_\_\_ থেকে বিড়াল ডাকছে।

গ) তাঁর ঘরে সুন্দর দেখে \_\_\_\_\_ রেখে।

ঘ) তুমিও \_\_\_\_\_ করে তৈরি থাকো উল্লাস।

ঙ) দরজার \_\_\_\_\_ বাতাসে ধড়াস ধড়াস করে।

চ) চন্দন নগর থেকে \_\_\_\_\_ আসবেন।

২। সঠিক উত্তরের ঘরে (✓) চিহ্ন বসাও

4x1=4

ক) ফুলদানিতে থাকবে

১) কুন্দফুল  ২) আকন্দফুল  ৩) কুন্দ ও আকন্দ থাকবে

খ) ভারি কষ্ট হবে-

১) গাড়ি না পেলে  ২) ছাতা না পেলে  ৩) ট্রেন না পেলে

গ) বিছানায় চঞ্চল হয়ে উঠল-

১) খোকা  ২) খুকি  ৩) বাপু

ঘ) গান গাইতে এসেছে-

১) অন্ধ কানাই  ২) কুঞ্জবিহারী  ৩) বোস্টমি

৩। বাঁদিকের সাথে ডান দিক মিলিয়ে দাও।

7x1=7

ক) সৃষ্টিধর বিড়াল

খ) উল্লা পাড়া ছাতা

গ) রান্নাঘর অসুখ

ঘ) অশ্বখ গাছ পঁচা

ঙ) বৃষ্টি ঝিল্লি

চ) রঞ্জন খেলা

ছ) উচ্ছের খেত শেয়াল

৪। সঠিক অর্থের পাশে (✓) চিহ্ন দাও।

4x1=4

ক) মুশকিল-  সুবিধা  অসুবিধা

খ) উত্তম-  ভালো  খারাপ

গ) চঞ্চল-  স্থির  অস্থির

ঘ) বিস্তর -  অনেক  অল্প

৫। বিপরীত শব্দটির পাশে (✓) চিহ্ন দাও।

ক) পশ্চিম -	পূর্ব <input type="checkbox"/>	দক্ষিণ <input type="checkbox"/>
খ) কালো -	লাল <input type="checkbox"/>	সাদা <input type="checkbox"/>
গ) ঘরে -	ভিতরে <input type="checkbox"/>	বাইরে <input type="checkbox"/>
ঘ) ঘন -	পাতলা <input type="checkbox"/>	নরম <input type="checkbox"/>

৬। সংখ্যার নাম লেখো।

25

৫৯ _____	৫৪ _____	৫২ _____
৭২ _____	৬০ _____	৬৬ _____
৭৫ _____	৮০ _____	৫৬ _____
৭৪ _____		

৭। প্রশ্ন গুলির এক কথায় উত্তর লেখো।

7x2=14

ক) কে দরজায় ধাক্কা দিচ্ছে ?

উত্তর:-

খ) কে লজ গুঁস এনে দেবে ?

উত্তর:-

গ) কার ঘরে ফুলদানি রাখতে বলা হয়েছে ?

উত্তর:-

ঘ) সৃষ্টিধরকে কী খুঁজে আনতে বলা হয়েছে ?

উত্তর:-

ঙ) কে খুকুর কাছে থাকবে ?

উত্তর:-

চ) কে গান গাইতে এসেছে ?

উত্তর:-

ছ) কোন গায়ক কে ডাকতে বলা হয়েছে ?

উত্তর:-

৮। প্রশ্ন গুলির উত্তর লেখো।

5

ক) পূর্ব দিকের মেঘের রং কেমন ?

উত্তর:-

খ) কে খাতার পাতা ছিঁড়ে দিয়েছে ?

উত্তর:-



**CONTAI PUBLIC SCHOOL**  
**Final Assessment 20-21**

**Class - II**  
**Subject - Computer studies**  
**Name: \_\_\_\_\_**

**F.M.- 75**  
**2 Hrs**

**Sec: \_\_\_\_\_**

**A. Underline the correct answer.**

**8 x 1 = 8**

1. Which of the following keys is used for typing in uppercase?  
(i) Home                      (ii) Delete                      (iii) Caps lock
2. What type of device is a mouse?  
(i) Pointing                      (ii) Running                      (iii) Eating
3. What provides different types of colors that you can choose to fill any color in your drawing?  
(i) New Box                      (ii) Color Box                      (iii) Tool Box
4. Where is the mouse usually kept?  
(i) Mouse Pad                      (ii) Monitor                      (iii) Keyboard
5. Where do you make drawing in Paint?  
(i) Tool Box                      (ii) Color Box                      (iii) Drawing Area
6. A \_\_\_\_\_ mouse has no cable?  
(i) Cordless                      (ii) Serial                      (iii) Fish
7. Which of the following tool is used to make a circle?  
(i) Line Tool                      (ii) Rectangle Tool                      (iii) Oval Tool
8. Which key is used to give space between words?  
(i) Delete                      (ii) Enter                      (iii) Space

**B. Write True or False for the following statements.**

**8x1= 8**

1. We draw a circle with an oval tool. \_\_\_\_\_
2. A mouse can be used to draw pictures on the computer. \_\_\_\_\_
3. The Backspace key is used as an eraser. \_\_\_\_\_
4. Rectangle tool can be used to draw circles. \_\_\_\_\_
5. Alphabet keys are used to type the numbers. \_\_\_\_\_
6. The Delete key is the longest key on the keyboard. \_\_\_\_\_
7. The right-click menu is also called the pop-up menu. \_\_\_\_\_
8. We can open saved drawings in Paint. \_\_\_\_\_

**C. Fill in the blanks with the correct word.**

**6x 1.5=9**

**ctrl +s , End , line , optical , square , Arrow**

1. \_\_\_\_\_ keys are also known as the cursor control keys.
2. A \_\_\_\_\_ mouse has a small wheel in the middle.
3. \_\_\_\_\_ key brings the cursor to the end of the line.

4. The \_\_\_\_\_ shape used to draw a straight line.
5. The \_\_\_\_\_ shape is used to draw a square.
6. The shortcut key for saving a file is \_\_\_\_\_.

D. Answer the following questions.

6 x 2 = 12

1. What is the use of Keyboard?
2. Write two components of Paint window.
3. What do you know about Function keys?
4. What is mouse?
5. Write two different tools in the Tools group.
6. How many shift keys are there on the keyboard?

E. Give one word answer for the following.

10 x 1.5=15

1. How many types of keys are there on a keyboard ?
2. Which button is used to click on to save a file?
3. Name the arrow used to point on the computer monitor.
4. The mouse should be placed on it. What is it?
5. Where we can draw a picture in Paint?
6. Which tool is used to draw free-hand?
7. Which click is used to open a window or program on the monitor?
8. Name the keys that are used to move the cursor on the screen.
9. Which mouse action helps us to select an icon?
10. Which tool will we use to rub out a part of a drawing?

F. Unscramble the jumbled words

6 x 1.5 = 9

1. OMUSE = \_\_\_\_\_
2. LCIKC = \_\_\_\_\_
3. UDBLEO LICKC = \_\_\_\_\_
4. OSUEM DAP = \_\_\_\_\_
5. ONIRETP = \_\_\_\_\_
6. YEKOBRAD = \_\_\_\_\_





G. Match the following :-

4 x 1 = 4

**Column A**

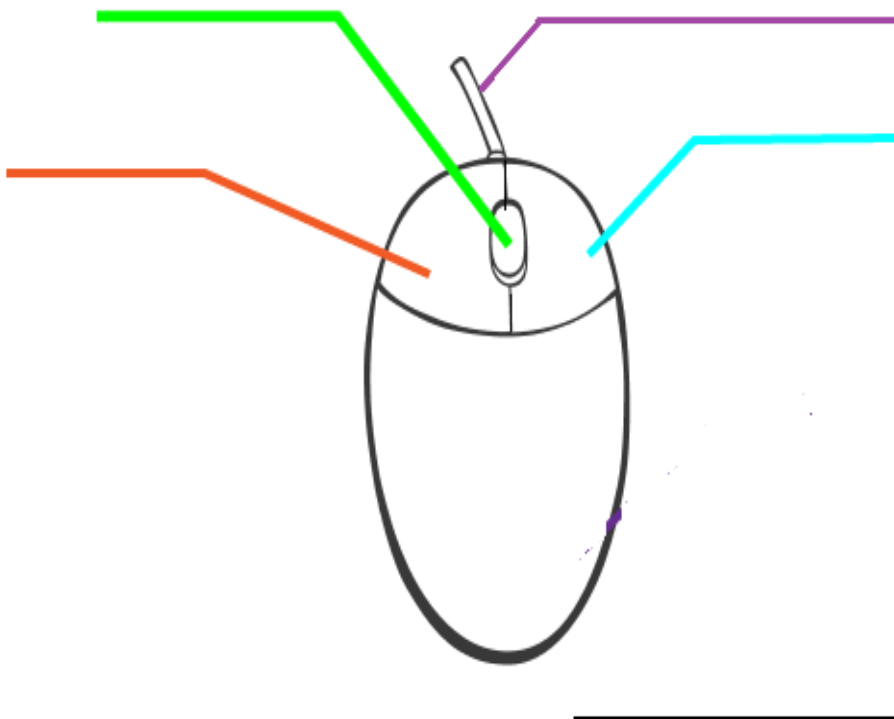
1. Alphabet keys
2. Special keys
3. Function keys
4. Number keys

**Column B**

- a) 
- b) 
- c) 
- d) 

H. Draw and label it :-

5+5= 10



**CONTAI PUBLIC SCHOOL**  
**Final Assessment 2020-21**

**Class – II**  
**Subject – Drawing**

**Time : 1 hour**  
**Grade obtained:\_\_\_\_\_**

**Name:\_\_\_\_\_ Section: \_\_\_\_\_**

**Q. Draw and colour any one object of the following:**

- a) Deer
- b) Tweety
- c) Angry birds
- d) Car